

Name _____

20-1
-3

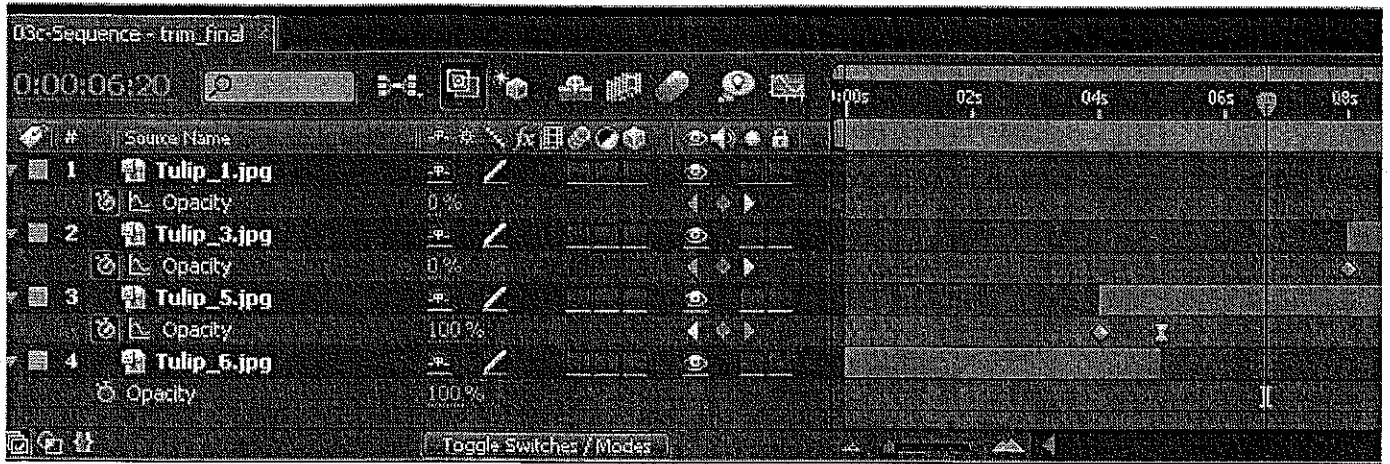
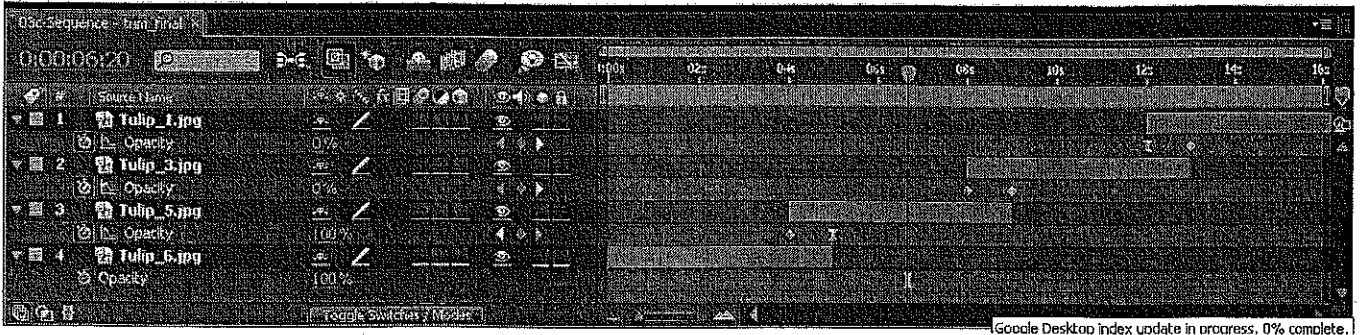
Row number _____

Seat number _____

Monday, May 03, 2010

112

1. What two steps would you need to do, given the following situation as you see it on the Timeline here, so that the **Tulip 5.jpg layer** would have its **IN point** starting at 6 seconds and 20 frames (about 6 2/3 seconds is where CTI is) instead of just before the 4 second mark? BE SPECIFIC please.



OK 1) Make sure the CTI is at the correct time and select Tulip 5.jpg
 OK 2) Hit the [button to move the In point

2. How do you change the end of the PLAYBACK RANGE to where the CTI is currently positioned, using a keyboard shortcut to do it? What keystroke, in other words?

4 |] or [~~Ctrl+]~~

3. Which of the following is produced by rendering our After Effects COMP so we can publish it up to sunny.uni.edu? Which **one** is produced by the AFTER EFFECTS software? Choose the ONE best answer please.

1 | (FLV) (SWF) HTML FLA

2

Name _____

Row number _____

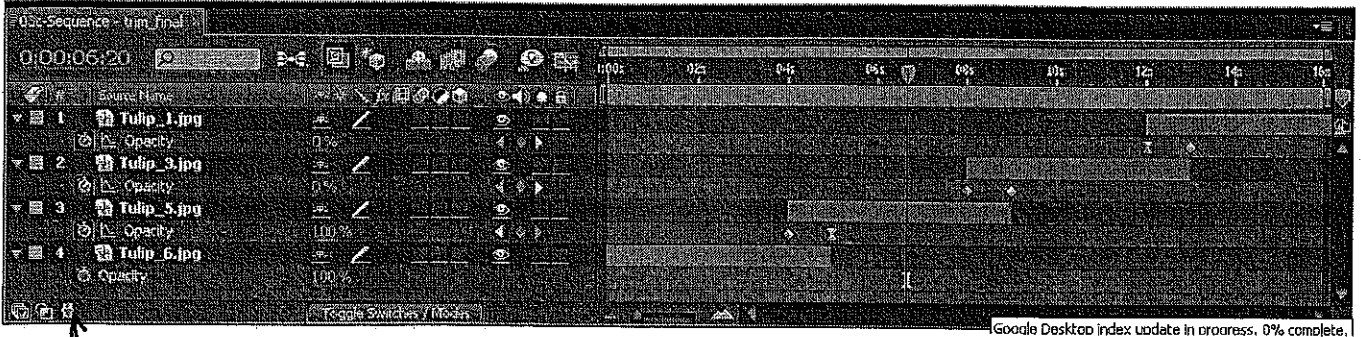
Seat number _____

Monday, May 03, 2010

1. How many Opacity keyframes in the following TULIPS 4 layer COMP screen snapshot are there?

OK

6



OK

2. Draw an arrow to what icon you would have to click on the above Tulip layers timeline screen snapshot so that you could see the IN/OUT/DURATION/STRETCH columns? Make sure your arrow clearly indicates the correct icon in the above snapshot.

3. Keyframe Velocity involves influence and IV and OV, according to the book, the lectures and the videos. What does IV stand for? What does OV stand for? *Inward velocity Outward velocity*

OK

4. Which of the following shortcuts TRIM or UNTRIM the selected layer to where the CTI is positioned? Circle all those that do.

OK


- [
-]
- I
- O
- Alt+[
- Alt+]
- B
- N

5. Explain what the B and the N keyboard shortcuts do. Just explain the B keyboard shortcut, please.

Moves the CTI to the beginning or end of the timeline.

6. What is the keyboard shortcut for selecting ALL the Tulip layers?

OK



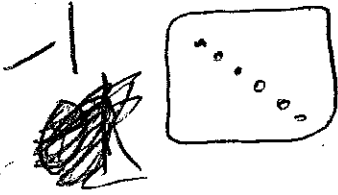
Control + A

7. Circle the Create a New Comp from the footage you dragged to it icon.

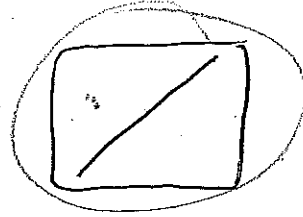
Name.

4

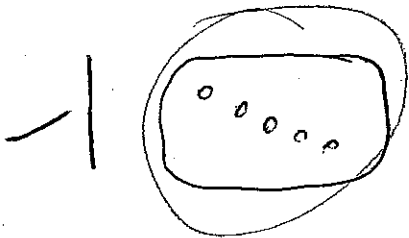
8. Which type of Frame Blending shows a crossfading effect on sharp footage?



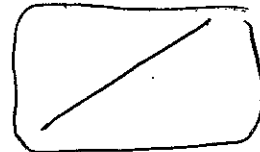
or



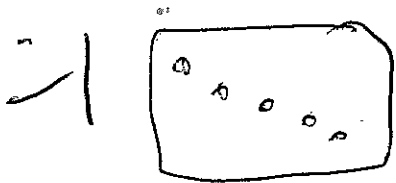
9. Which type is associated with what is called pixel motion?



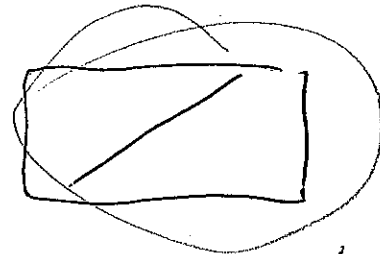
or



10. Which type is called Frame Mixing or mix mode in Lynda tutorial?



or



11. When is preserve frame rate needed? Why?

1/ If you are time stretching, but you don't want the time stretch to affect the frame rate